

NISCORT FATHER AGNEL SCHOOL, VAISHALI (2017 – 2018)
SELF LEARNING WORKSHEET

PERIOD III

1. Observe the pattern and fill in the blanks :

a) 40 50 60 _____ _____

b) 36 38 40 _____ _____

c) 173 176 179 _____ _____

d) _____ 405 410 _____ 420

e) 609 _____ 629 _____ 649 _____

f) 822 824 _____ 828 _____

2. Observe the pattern and write the skip counting numeral:

a) 220 224 228 232

The number skipped by _____

b) 540 550 560 570

The number is skipped by _____

c) 761

766

771








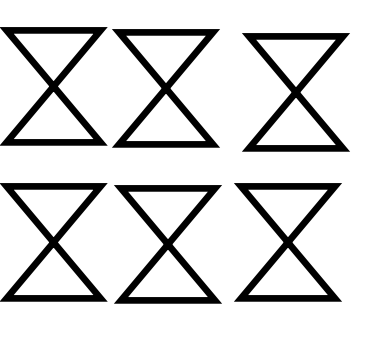
776

The number is skipped by _____

3. Solve the dodging tables :

$3 \times 3 =$	$6 \times 9 =$
$2 \times 6 =$	$4 \times 7 =$
$3 \times 9 =$	$2 \times 2 =$
$5 \times 4 =$	$8 \times 3 =$
$6 \times 5 =$	$5 \times 3 =$
$6 \times 4 =$	$9 \times 5 =$
$4 \times 8 =$	$10 \times 2 =$
$6 \times 6 =$	$9 \times 4 =$
$9 \times 7 =$	$8 \times 6 =$
$3 \times 4 =$	$7 \times 8 =$
$10 \times 6 =$	$2 \times 7 =$
$8 \times 7 =$	$9 \times 10 =$

4. Look at each group and do the addition.

	+		=	
	+		=	
	+		=	
	+		=	