

NISCORTFATHER AGNEL SCHOOL, VAISHALI (2017-18)
SELF LEARNING WORKSHEET - 3

PERIOD I

NAME: _____ CLASS-II/SEC: _____ ROLL NO: _____ DATE: _____

1. Complete the following table:

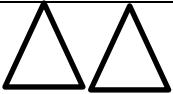







56+9 =	_____
990+_____	999
____+5=	17
35+____=	42
266+3 =	_____
____+6 =	47

2. Add the following:

T O	H T O
7 7 + 2 1 <div style="border: 1px solid black; width: 100px; height: 20px; margin-top: 5px;"></div>	3 1 4 + 3 0 4 <div style="border: 1px solid black; width: 100px; height: 20px; margin-top: 5px;"></div>

$\begin{array}{r} 68 \\ + 52 \\ \hline \end{array}$	$\begin{array}{r} 785 \\ + 967 \\ \hline \end{array}$
$\begin{array}{r} 72 \\ + 14 \\ \hline \end{array}$	$\begin{array}{r} 832 \\ + 155 \\ \hline \end{array}$
$\begin{array}{r} 55 \\ + 47 \\ \hline \end{array}$	$\begin{array}{r} 490 \\ + 288 \\ \hline \end{array}$

3. Add the shapes given and write the answer :

	+		
	+		
	+		
	+		

4. Solve the following word problems

a) How much is 8 plus 9 ?

Ans _____

b) Find the sum of 5, 2 and 7 ?

Ans _____

c) There are 38 boys and 27 girls in a class ? How many students are there in a class?

Ans _____

d) A fruit seller had 248 apples, 168 bananas and 394 oranges. How many fruits did he have in all ?

Ans _____

e) Ram has 38 pencils. Manoj has 46 pencils. How many pencils do they have altogether?

Ans _____

f) A school library has 521 books in English and 345 books in Hindi. How many books are there in the library?

Ans _____
