











NISCORT FATHER AGNEL SCHOOL, VAISHALI (2017-18)
SELF LEARNING WORKSHEET-13
CLASS-III
SUBJECT-MATHS
TOPIC - TIME

1. What time is it? Write in figures.

 _____	 _____	 _____
 _____	 _____	 _____
 _____	 _____	 _____


2. Draw the hands on the clock according to the given time.

1)




3:15

2)




6:00

3)




2:45

4)




12:00

5)




4:30

6)




1:00

7)




11:15

8)



4:00

9)



11:30

3. Write the following times in figures. The first one is done for you.

(a) Half past 1 = 1:30

(b) Quarter past 8 = _____

(c) Quarter to 4 = _____

(d) 6 o' clock = _____

(e) Half past five = _____

(f) Quarter past eleven = _____

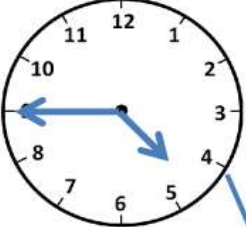

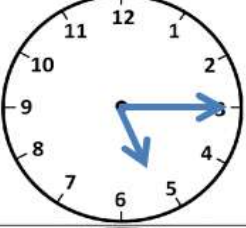


(g) Quarter to seven = _____

(h) 20 minutes past 4 = _____

(i) 40 minutes past 6 = _____

(j) 25 minutes past 9 = _____

4. Match the clock with their times. The first one is done for you.

	Quarter past 5	5:15
	3 o'clock	4:45
	Quarter to 5	3:00
	8 o'clock	10:30
	Half past 10	8:00

5. Write the following times in other way (in words).

(a) 2:35 = 35 minutes past 2

(b) 4:45 = _____

(c) 5:30 = _____

(d) 12:15 = _____

(e) 9:00 = _____

(f) 7:20 = _____

(g) 3:50 = _____

6. Fill in the blanks:

- (a) An hour hand takes _____ hours to move from number 3 to number 8.
- (b) A minute hand takes _____ minutes to move from number 5 to number 11.
- (c) A minute hand takes _____ minutes to move from number 10 to number 4.
- (d) An hour hand takes _____ hours to move from number 7 to number 4.
- (e) At 10:30, the minute hand is at _____ and the hour hand is between _____ and _____.
- (f) When it is quarter to an hour, the minute hand has covered _____ minutes.
- (g) When it is quarter past an hour, the minute hand has covered _____ minutes.

7. Cross out the incorrect period of time.

- | | |
|---------------------------|---------------------|
| (a) Tying your shoe laces | 1 hour / 1 minute |
| (b) Watching a movie | 2 hours / 2 minutes |
| (c) Making a phone call | 3 hours / 3 minutes |
| (d) Sleeping in the night | 8 hours / 8 minutes |
| (e) Writing school's name | 1 hour / 1 minute |
| (f) Playing | 1 hour / 1 minute |

8. What time will be :

- (a) 3 hours after 4:20 - _____
- (b) 10 minutes after 1:25 - _____
- (c) 2 hours before 6:30 - _____
- (d) 20 minutes before 8:40 - _____
- (e) 4 hours before 5 o'clock - _____
- (f) 5 hours after 3 o'clock - _____

ANSWERS:

3. (b) 8:15 (c) 3:45 (d) 6:00 (e) 5:30 (f) 11:15 (g) 6:45 (h) 4:20
(i) 6:40 (j) 9:25

5. (b) Quarter to 5 (c) Half past 5 (d) Quarter past 12 (e) 9 o'clock
(f) 20 minutes past 7 (g) 50 minutes past 3

6. (a) 5 (b) 30 (c) 30 (d) 9 (e) 6, 10 and 11 (f) 45 (g) 15

8. (a) 7:20 (b) 1:35 (c) 4:30 (d) 8:20 (e) 1 o'clock (f) 8 o'clock

NISCORT FATHER AGNEL SCHOOL, VAISHALI (2017-18)
SELF LEARNING WORKSHEET - 14
CLASS-III
SUBJECT - MATHS
TOPIC-TIME

1. Write the following times in am or pm:

- (a) 7:25 morning - _____
- (b) 11.30 morning - _____
- (c) 6:30 evening - _____
- (d) 4:15 evening - _____
- (e) 1:20 afternoon - _____
- (f) 10:30 night - _____

2. Write morning, night, evening and afternoon for the following times:

- (a) 5:15 am - _____
- (b) 3:30 pm - _____
- (c) 2:15 pm - _____
- (d) 7:20 pm - _____
- (e) 11:20 pm - _____
- (f) 8:15 am - _____

3. Fill in the blanks:

- (a) 1 hour = _____ minutes
- (b) 1 minute = _____ seconds
- (c) 1 day = _____ hours
- (d) 1 year = _____ days
- (e) 1 leap year = _____ days
- (f) 1 month = _____ days
- (g) 1 week = _____ days
- (h) 1 year = _____ months

4. Convert into minutes:

(a) 2 hrs

(b) 5 hrs

(c) 11 hrs

(d) 23hrs

5. Convert into days:

(a) 11 weeks

(b) 9 years

6. Convert into hours:

(a) 16 days

(b) 4 days

7. Tell whether the given time is daylight or darkness?

(a) 12:30 pm - _____

(b) 1:15 am - _____

(c) 7:45 pm - _____

(d) 8:30 am - _____

(e) 12:15 am - _____

(f) 3:30 pm - _____

8. What time was :

(a) 20 min before 6:40 - _____

(b) 2 hours before 7:35 - _____

9. What time will be:

(a) 25 min after 2:15 - _____

(b) 6 hours after 3:25 - _____

10. The birds began chirping at 6:30 am. They chirped for 2 hours. What time did they finish chirping?

11. Maggie went for a walk. She started at 6:30 pm and finished at 7:30 pm. For how long did she walk?

12. A movie started at 12:30 pm and ended at 3:00 pm. What was the duration of the movie?

ANSWERS:

1. (a) 7:25 am
(b) 11:30 am
(c) 6:30 pm
(d) 4:15 pm
(e) 1:20 pm
(f) 10:30 pm

2. (a) morning
(b) afternoon
(c) afternoon
(d) evening
(e) night
(f) morning

3. (a) 60
(b) 60
(c) 24
(d) 365
(e) 366
(f) 30
(g) 7
(h) 24

4. (a) 120 minutes (b) 300 minutes (c) 660 minutes (d) 1380 minutes

5. (a) 77 days (b) 3285 days

6. (a) 384 hours (b) 96 hours

7. (a) daylight (b) darkness (c) darkness (d) daylight (e) darkness
(f) daylight

8. (a) 6:20 (b) 5:35

9. (a) 2:40 (b) 9:25

10. 8:30 am

11. 1 hour

12. 2 hours 30 minutes