

SELF LEARNING WORKSHEET – 9

CLASS – III      EVS

**Match the following:-**

- |                |                    |
|----------------|--------------------|
| 1. Gentle wind | a. clouds          |
| 2. Winter      | b. rises up        |
| 3. Monsoon     | c. low temperature |
| 4. Altitude    | d. breeze          |
| 5. Hot air     | e. woollen clothes |

**Fill in the blanks with the correct word:-**

1. \_\_\_\_\_ is the hottest time of the day.
2. The weather of a place is directly related to the amount of \_\_\_\_\_ a place receives.
3. Rainfall brings down the \_\_\_\_\_ of a place.
4. Nainital has a \_\_\_\_\_ climate than Delhi.
5. Weather changes every \_\_\_\_\_.

**Name any four things on which weather depends.**

---

---

---

---

**What will happen if the temperature of our Earth keeps on increasing?**

---

---

---





---

SELF LEARNING WORKSHEET – 10

CLASS – III EVS

Given below are the weather symbols. Observe each of them carefully and write what each symbol states using the help box given below:-

Lightning, Sunshine, Mist, Rain, Cloudy, Snow, Clouds with sunny intervals, Rain and snow mixed



**State true or false:-**

1. Rains increase the temperature of a place. \_\_\_\_\_
2. Land gets heated faster than water. \_\_\_\_\_
3. Floods are always destructive and cause damage to life. \_\_\_\_\_
4. Seasons have no effect on what we eat. \_\_\_\_\_
5. Human activities are causing damage to the Earth. \_\_\_\_\_

**What if the seasons did not change?**

---

---

---

**Trees on the roadside are not watered. How do they get the water they need?**

---

---

---

---