

**NISCORT FATHER AGNEL SCHOOL, VAISHALI**  
**SELF LEARNING WORKSHEET**

**PERIOD II (2017-18)**

NAME: \_\_\_\_\_ CLASS-II/SEC: \_\_\_\_\_ ROLL NO: \_\_\_\_\_ DATE: \_\_\_\_\_

Q1. Keeping - "Hundreds chart" in mind, find the answer of the following.

1.  $45 + 40 =$  \_\_\_\_\_

2.  $27 + 10 =$  \_\_\_\_\_

3.  $33 + 20 =$  \_\_\_\_\_

4.  $18 + 30 =$  \_\_\_\_\_

5.  $12 + 40 =$  \_\_\_\_\_

6.  $51 + 30 =$  \_\_\_\_\_

Q2 Find the double of the following numbers:

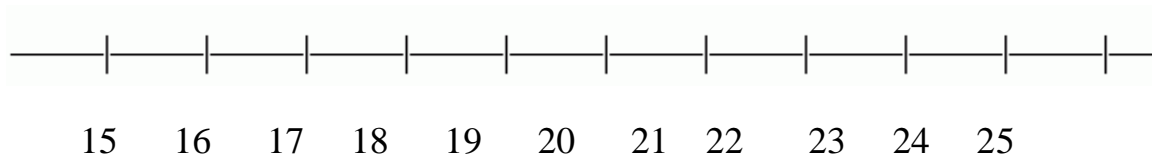
Numeral	Double
4	
9	
11	
17	
20	

Q3 Moving forward, subtract on the given number line .

1  $69 - 66 = \underline{\hspace{2cm}}$

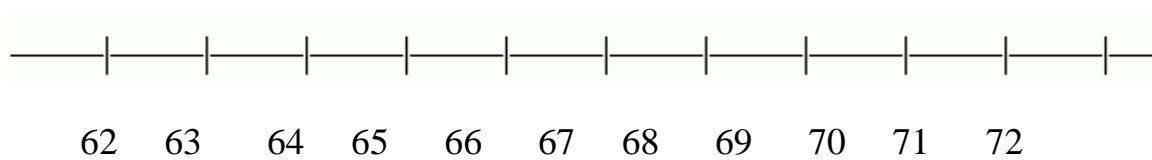


2  $25 - 19 = \underline{\hspace{2cm}}$

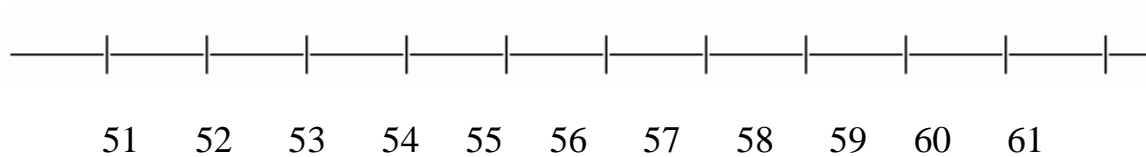


Q3 Moving backwards, subtract on the given number line.

1.  $72 - 7 = \underline{\hspace{2cm}}$



2.  $59 - 6 = \underline{\hspace{2cm}}$



Q4 Subtract the following

	H	T	O
	8	7	0
-	3	6	0

	H	T	O
	5	6	9
-	1	8	1

Q.5 Arrange in columns and subtract the following:

a)  $508 - 112$

	H	T	O

b)  $719 - 513$

	H	T	O

Q 6 Complete the following table:

$244 - 9 = \underline{\hspace{2cm}}$	$250 - 245 =$
$490 + 30 = \underline{\hspace{2cm}}$	$899 - 895 = \underline{\hspace{2cm}}$
$\underline{\hspace{2cm}} - 1 = 500$	$668 - 7 = \underline{\hspace{2cm}}$
$45 + \underline{\hspace{2cm}} = 65$	$255 - \underline{\hspace{2cm}} = 255$
$785 - 781 = \underline{\hspace{2cm}}$	$700 - \underline{\hspace{2cm}} = 699$
$\underline{\hspace{2cm}} + 50 = 51$	$896 - \underline{\hspace{2cm}} = 0$
$55 - 51 = \underline{\hspace{2cm}}$	$985 + \underline{\hspace{2cm}} = 986$
$\underline{\hspace{2cm}} + 1 = 480$	$\underline{\hspace{2cm}} + 300 = 300$
$412 + 7 = \underline{\hspace{2cm}}$	$99 + 6 = \underline{\hspace{2cm}}$
$279 + 5 + 8 = \underline{\hspace{2cm}}$	$689 + 7 + 3 = \underline{\hspace{2cm}}$
$330 + 10 + 3 = \underline{\hspace{2cm}}$	$897 + 280 = 280 + \underline{\hspace{2cm}}$
$550 + \underline{\hspace{2cm}} = 550$	$144 + \underline{\hspace{2cm}} = 46 + 144$