

NISCORT FATHER AGNEL SCHOOL, VAISHALI
SELF-LEARNING ENGLISH WORKSHEET-5,
PERIOD -I (2017-18)
CLASS -IV

Q.1 Read the paragraph and answer the following questions carefully.

It was a warm sunny morning. A little tortoise was lying in the sun near the sea. It was a beautiful day and she had no worries but she wasn't happy. She looked at the seagulls and the other sea birds. They were very happy, flying up and down, enjoying the fresh air and catching fish from the sea below.

An eagle asked her why she was so sad. She said, "I'm sad as I have very short legs and can walk very slowly. I wanted to see different places. I wish I could fly! You fly so gracefully. Can you teach me?"

"Of course I can teach you but you'll have to give me something in return." "I'll give you anything you want! Exclaimed the tortoise." The eagle picked up the tortoise, flapped his wings and flew up in the sky. The tortoise was excited as she saw the clouds above her head and the clear blue water of the sea below. She saw tall mountains, little houses, animals and people and they all looked so tiny.

"This is wonderful I'm flying! Look at me! And she shouted and laughed at the top of her voice." Suddenly the eagle opened its talons, the tortoise began to fall quickly to the ground. "Help!" cried the tortoise "I'm falling."

She luckily landed on a big pile of soft leaves. "I think I'll just walk from now on." Said the little tortoise to herself.

Q 1. What were the other birds doing while the tortoise was lying near the sea?

Q 2. Why was the little tortoise sad?

Q 3. What all did the tortoise see while she was flying with the eagle?

Q 4. What happened while they were flying?

Q 5. Where did the tortoise land?

Q 6. What did the little tortoise decide at the end?

Q 7. What is the moral of the story?

Q 8. Give the story a suitable title.

Q 9. Write collective nouns for the following.

a. Birds _____

b. Trees _____

c. Houses _____

d. Leaves _____

निस्कोर्ट फादर एग्नल स्कूल, वैशाली

कक्षा (चौथी) सत्र :- (२०१७-२०१८)

स्व-अभ्यास पत्रिका - १

नाम अनुक्रमांक दिनांक

- चित्र देखिए तथा उसके विषय में कम से कम दस पंक्तियाँ लिखिए ।



.....

.....

.....

.....

NISCORTFATHER AGNEL SCHOOL, VAISHALI

SELF LEARNING WORKSHEET - III

EVS, CLASS-IV

Q1. State True (T) or false (F):-

- a. Early man lived in buildings. _____
- b. Germs grow in sunlight. _____
- c. Green plants around the house and planted inside the house help in keeping the air clean and fresh. _____
- d. House keeps us safe from harsh weather, wild animals and dust. _____
- e. Now-a-days most of the houses in cities are made of bricks. _____
- f. Stilt house is common in desert area. _____
- g. Wood helps to keep the house cool during summer and warm during the winter.

- h. Mud walls and straw roofs keep houses hot in summer. _____
- i. Igloo is also called snow house. _____

Q2. Fill in the blanks.

- a. All the drains should be kept _____.
- b. Free flow of fresh air is called _____.
- c. Waste can cause _____ problems if not managed properly.
- d. Sunlight makes the house _____ and _____.
- e. Air enters our house from _____ or _____.
- f. _____ were the first to make baked brick houses.
- g. _____ are floating houses on water bodies like lake.
- h. _____ is a house built by using block of snow generally in dome shape.

Q3. Answer the following.

- a. Why is a caravan called the house on wheel?

b. Why do people build houses on stilt in some regions?

c. Why is sunlight important for a house?

d. Why wooden houses are ideal homes for people living in cold but forested regions?

Q.4 Write the difference between:

Houseboat	Stilt house

Wooden house	Clay house

NISCORTFATHER AGNEL SCHOOL, VAISHALI

SELF LEARNING WORKSHEET - IV

EVS, CLASS-IV

Q1. State True (T) or false (F).

- a. The food we swallow moves down into oesophagus (food pipe). _____
- b. Lower part of the stomach opens into the small intestine. _____
- c. Gastric juices are secreted by heart that helps in digestion of food. _____
- d. Lungs are located in slanting position in the centre of chest. _____
- e. Breathing of air is called exhalation. _____
- f. Kidneys filter water from our blood. _____

Q2. Fill in the blanks.

- a. _____ controls the entire function of our body.
- b. Our heart beats about _____ times in a minute.
- c. Arteries appear _____ in colour.
- d. The liquid waste of our body gets collected in the _____ and is thrown out of body as urine.
- e. Our brain is very delicate and is protected by _____ from outside.
- f. _____ helps in breathing.

Q3. Answer the following:

- a. Name some internal organs.

- b. Explain veins and arteries.

- c. What do you understand by inhalation and exhalation?

d. Write functions of the following internal organs.

Stomach:

Liver :

Brain :

Lungs :

Q4. Answer in one word:

a. A muscular, elastic, pear shaped bag under the ribs.

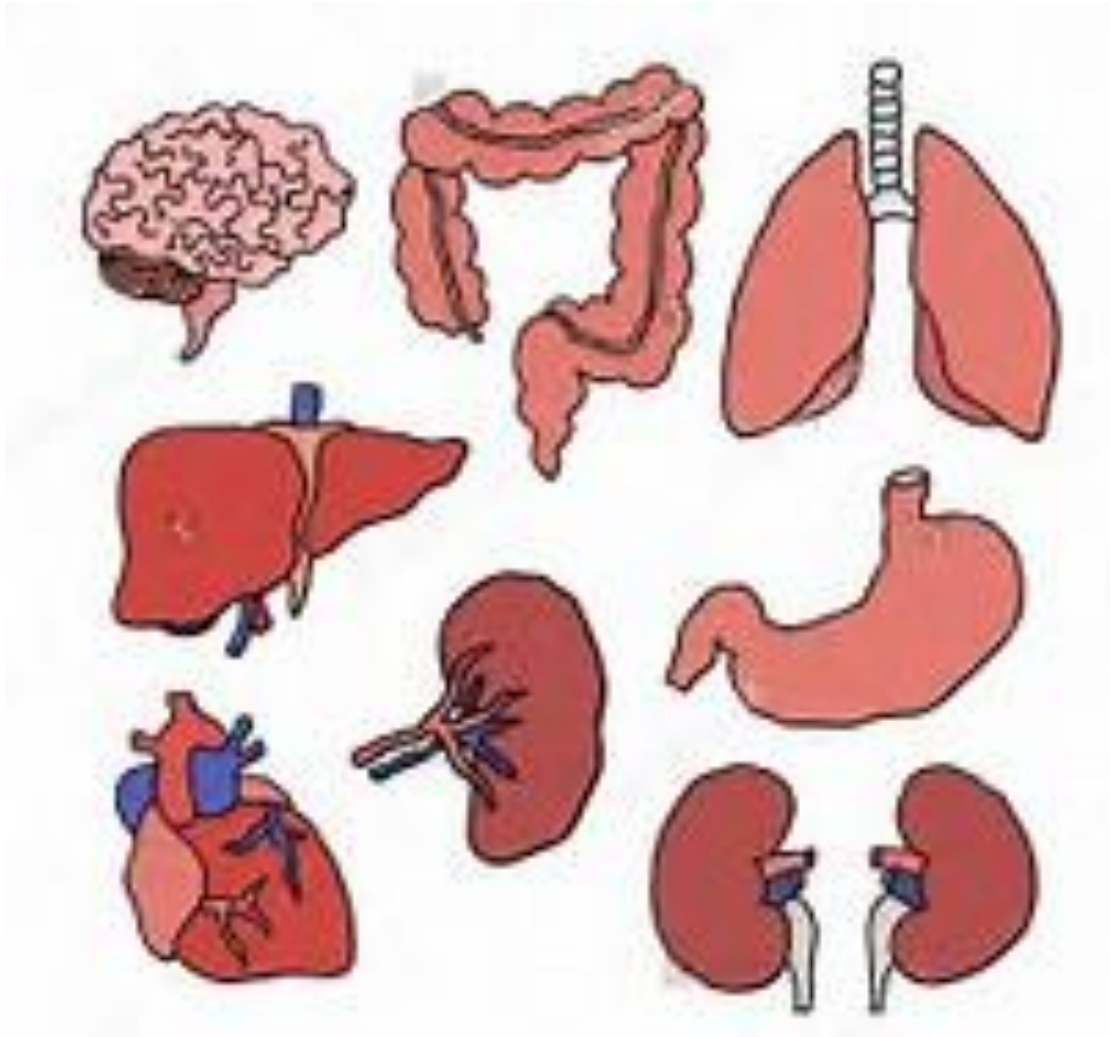
b. It appears blue in colour and carries waste material and carbon dioxide.

c. It receives signals from our sense organs and sends information to other part of the body _____

d. It circulates blood throughout our body through blood vessels.

e. Pair of spongy, cone shaped structures located in chest and protected by rib cage.

Q.5. Identify the following internal organs of our body:



NISCORT FATHER AGNEL SCHOOL, VAISHALI (2017-18)
SELF LEARNING WORKSHEET-3
CLASS-IV
TOPIC - MULTIPLICATION

1. Find the product by using vertical method:

(a) 247×36

(b) 2428×28

(c) 405×22

(d) 819×209

(e) 1224×403

(f) 480×112

2. Find the product:

(a) $5 \times 1000 =$ _____

(b) $16 \times 2000 =$ _____

(c) $21 \times 4000 =$ _____

(d) $9 \times 5000 =$ _____

(e) $11 \times 9000 =$ _____

(f) $17 \times 5000 =$ _____

3. Fill in the blanks:

(a) $97 \times 6000 = 97 \times$ _____ $\times 1000$

(b) $108 \times 8000 = 108 \times 8 \times$ _____

(c) $113 \times 2000 = 113 \times 2 \times$ _____

(d) $2516 \times 9000 = 2516 \times$ _____ $\times 1000$

(e) $5000 \times 398 = 398 \times 5 \times$ _____

(f) $7000 \times 784 = 7 \times 784 \times$ _____

4. Fill in the blanks:

(a) The product of two numbers does not change even if we change the _____ of two numbers.

(b) The product of a number and 1 is the _____.

(c) The product of any number and 0 is _____.

(d) The product of 9999 and 100 is _____.

(e) On multiplying 17285 by 0, the product is _____.

5. A basket contains 228 apples. Find the number of apples in 325 baskets.

6. Ram has 520 currency notes of 20-rupee each. How much money does he have?

7. How many passengers are there in 325 buses, if each bus has 59 passengers?

8. The price of a pen is Rs. 120. Find the price of such 150 pens.
9. The cost of a toy is Rs 775. Find the cost of 15 such toys.
10. In a school the monthly fee of a student is Rs 225. What will be the total monthly fee collection of 625 students in that school?
11. A man saves Rs 350 per month. How much money does he save in 4 years?
12. What will be the product if we multiply the difference between 49113 and 22568 by 500?


ANSWERS:

1. (a) 8892 (b) 67,984 (c) 8,910
(d) 1,71,171 (e) 4,93,272 (f) 53,760
2. (a) 5000 (b) 32000 (c) 84000
(d) 45000 (e) 99000 (f) 85000
3. (a) 6 (b) 1000 (c) 1000
(d) 9 (e) 1000 (f) 1000
4. (a) order (b) number itself (c) 0
(d) 999900 (e) 17285
5. 74,100
6. 10,400
7. 19,175
8. 18,000
9. 11,625
10. 1,40,625
11. 1400
12. 13,272,500


NISCORT FATHER AGNEL SCHOOL, VAISHALI (2017-18)
SELF-LEARNING MATHS WORKSHEET-4
CLASS IV TOPIC-DIVISION

1.Divide to find Quotient and Remainder-:

a) $932 \div 4$




b) $777 \div 7$




c) $168 \div 8$




d) $78654 \div 4$



e) $67842 \div 8$



f) $52701 \div 6$



g) $21050 \div 5$

h) $1000 \div 3$

2. Divide and check your answer:-

a) $11566 \div 6$

b) $9081 \div 9$

c) $67837 \div 12$

d) $34701 \div 17$

e) $90012 \div 22$

f) $76543 \div 67$

g) $116783 \div 56$

h) $200507 \div 35$

3. Fill in the blanks:

(i) $21 \div 1 = ?$

(ii) $26 \div 1 = ?$

(iii) $43 \div 1 = ?$

(iv) $41 \div 41 = ?$

(v) $75 \div 75 = ?$

(vi) $628 \div 628 = ?$

(vii) $25 \div ? = 25$

(viii) $? \div 1 = 47$

(ix) $5 \div ? = 1$

(x) $? \div 927 = 1$

(xi) $0 \div 5 = ?$

(xii) $? \div 17 = 0$

(xiii) $29 \div 0 = ?$

(xiv) $125 \div 0 = ?$

4. Write 'true' or 'false' as the case may be for the following statements:

(i) Any number divided by 1 gives the number itself.

(ii) No number can be divided by zero.

(iii) A number divided by itself gives the result zero.

(iv) Zero divided by a number gives the result zero.

(iii) A number can be divided by a large number.

ANSWERS:-

1a)Q- 233 ,R-0 b) Q- 111, R-0 c) Q- 21, R-0 d) Q – 19663 , R-2 e) Q-8480 , R -2, f) Q- 8783 , R-3

g) Q- 4210 , R-0 h) 333 , R-2

3(i) 21 (ii) 26 (iii) 43 (iv) 1 (v) 1 (vi) 1 (vii) 1 (viii) 47 (ix) 5

(x) 927 (xi) 0 (xii) 0 (xiii) not defined (xiv) not defined

4. i) true (ii) true (iii) false (iv) true (iii) false